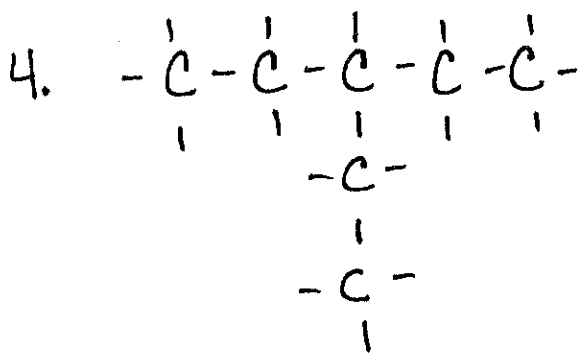
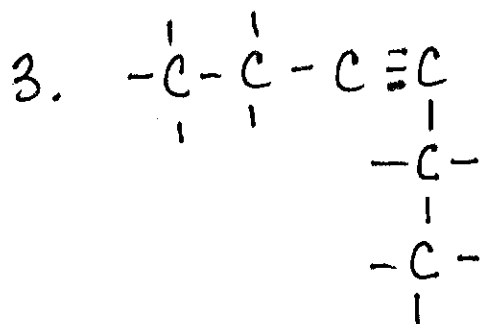
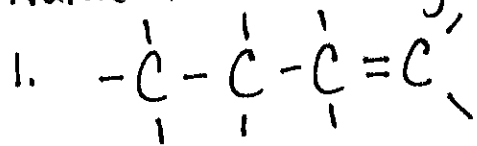


Name the following



Draw the following: If you can find the one that if you renamed the drawing, it would not match with the original - You're good!!

6. 3-decene

7. 2-ethylpentane

8. 4-methyl-2-nonene

9. 2-methyl-3-octene

10. 2-butyne

Optional: (more difficult - application of naming)

1. Draw: 2,4 octadiene

2. Draw: 2-butyl-1,3 butadiene